



The International  
School of Bombay

NURTURE • CHALLENGE • SUCCESS

**CLASS – III**  
**SUMMER ASSIGNMENT**







**Dear children,**

**It is summer time, I hope you would enjoy your holidays to the best of your capacities.**

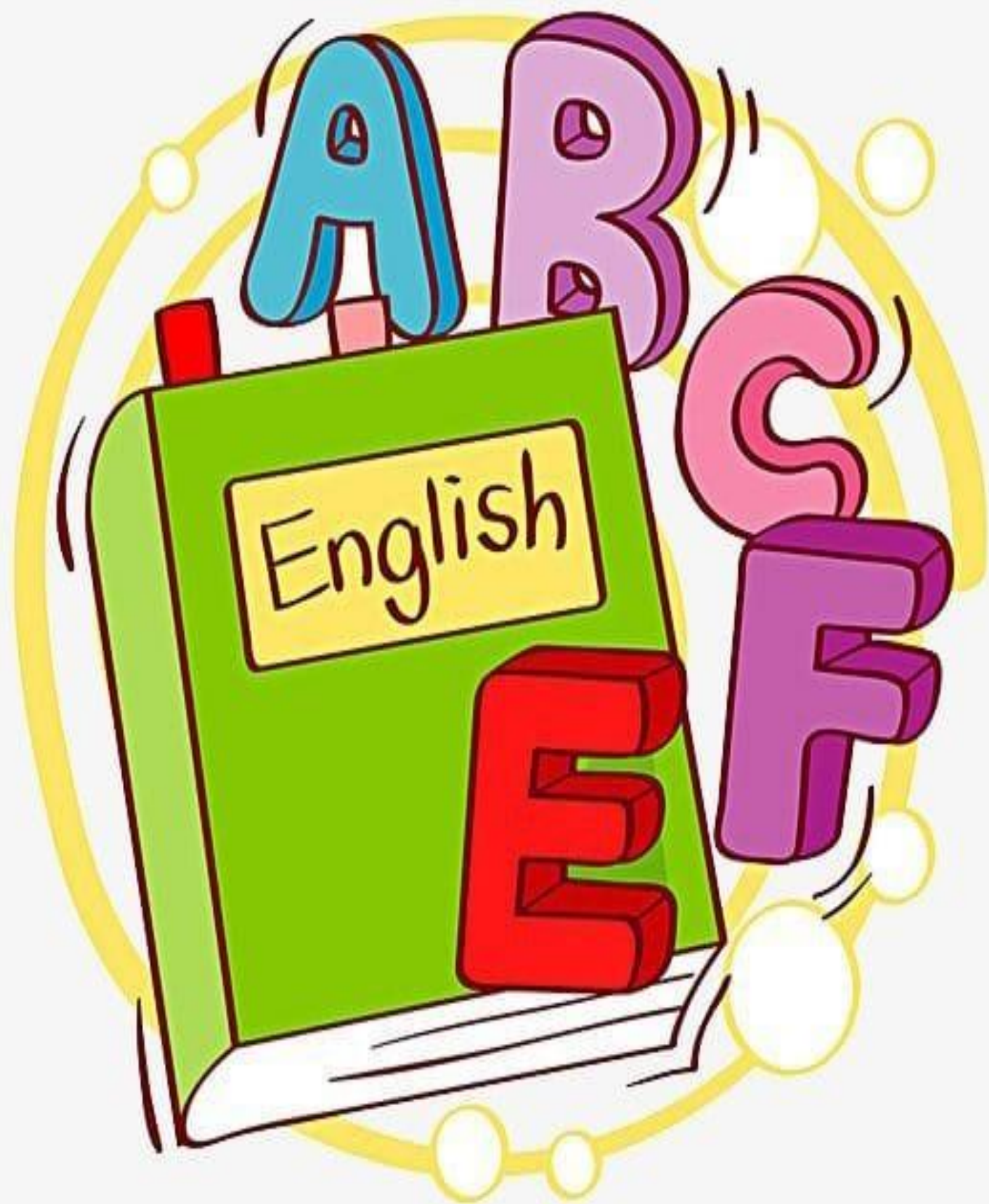
- ❖ **Spend good time with your family.**
- ❖ **Try to do your written work regularly to enhance your writing power.**
- ❖ **Pay special attention towards your health and hygiene.**
- ❖ **Don't play in the sun shine or on hot places.**

**General Instructions:**


- ❖ All work is to be done in the subject notebook.
- ❖ It should be neat and clean.
- ❖ Read all the homework carefully before starting of the homework.
- ❖ Please follow the instructions given in each subject homework.
- ❖ All the Homework will be marked and assessed, so it is **COMPULSORY**, to do all the Subject Homework.



**SUMMER**







**a) We need many things when we travel. Imagine that you are going on a holiday for ten days. Make a list of the things you would pack. Make it interesting by drawing your suitcase with all the things packed inside it.**

**Write about the excitement you were feeling and various steps of your packing.**

**b) Create a breakfast, lunch and dinner menu for a week to be followed at home. Make sure the diet is balanced and there is enough variety.**

**c) Malaysia is a south-east Asian country where people follow a different lifestyle.**

- **Find out and illustrate the landforms.**
- **Describe the climate, the people, their traditional dresses, their food and occupation.**

**d) Choose two of your favourite family members or friends or someone you know very well. Take their interview and write about them in a paragraph based on your interview.**

**e) Make a list of prepositions with examples.**

**f) Write an interesting story about an incident that took place on any festival.**

**g) Read/ listen any story and write it in your own words.**

h) How do you spend your Sunday with your family and friends. Write and paste the best pictures you clicked together.

i) Write any ten idioms and their meaning.

j) Given below is the outline of a story. Write a story based on the outline.

Frogs in the pond...., jumping and enjoying..., boys passed by...., saw frogs...., threw stones for fun...., some frogs died.... An elderly frog came out...., spoke to boys....,'What if fun for you is death for us'...., boys learnt a lesson.








शिक्षा

1. नीचे दिए गए संकेतों की सहायता से 'मेरा परिचय' शीर्षक पर 7-8 पंक्तियाँ लिखिए।



सात साल

माता-पिता का नाम



संचित / संचिता

सुबह जल्दी उठना



माता-पिता से प्यार

नियमित विद्यालय जाना

भाई / बहन का नाम

शाम को खेलना



पढ़ाई करना



मेरा परिचय

-----

-----

-----

-----

-----



-----

-----

-----

-----

-----



2. सही मात्रा वाला शब्द चुनकर खाली स्थान में लिखिए।

	मीत्र	मित्र	_____
	पिता	पीता	_____
	गिनती	गिनति	_____
	दुध	दूध	_____
	फूल	फुल	_____
	केला	कैला	_____
	बैल	बेल	_____
	औखली	ओखली	_____
	ओरत	औरत	_____



3. अपने किन्हीं पाँच मित्रों के नाम रेल के डिब्बों में लिखिए ।



अब इन नामों को वर्णमाला के हिसाब से क्रम में लिखिए।

\_\_\_\_\_

\_\_\_\_\_

\_\_\_\_\_

तुम्हारा नाम क्या है? अपने नाम का अर्थ भी लिखिए।

\_\_\_\_\_

\_\_\_\_\_

4. बाहर गोलों में लिखें शब्दों के बहुवचन खोजकर उनमें रंग भरिए।

लड़का      परी      पत्ता

प	रि	याँ	आ	ई	ऊ	ब	स्ते
ल्ते	आ	ए	कि	ता	बें	ई	ऊ
ख	पें	ध	फ	झ	थ	ष	ए
ई	सि	आ	थ	ध	ल	इ	के
ष	लें	फ	सा	ष	इ	ख	ई
ऊ	थ	ध	इ	ई	कि	आ	टॉ
मे	ज़ें	आ	कि	ख	याँ	फ	फ़ि
ए	ख	ऊ	लें	आ	फ	ध	याँ

मेज़      पेंसिल

साइकिल      टॉफी      बस्ता      किताब

5. धरती माँ/पृथ्वी का एक सुंदर चित्र बनाकर उस पर पाँच वाक्य लिखिए ।

6. हमारे देश के किन्हीं पाँच राज्यों के नाम व उनकी भाषाएँ लिख कर उनकी पोशाक के चित्र चिपकाएँ।

7. आप बड़े हो कर ऐसे कौन-से कार्य करना चाहेंगे, जिनसे देश को आप पर गर्व हो?

8. देश की धरती को सँवारने के लिए हमें क्या करना चाहिए?

9. अपनी पसंद की किसी एक कहानी की पुस्तक में से रोज़ एक कहानी पढ़िए और उसमें से पाँच नए शब्द कॉपी में लिखिए और उनसे पाँच वाक्य बनाइए।

(सहायक पुस्तकें - तेनाली रामा, पंचतंत्र एवं बीरबल और अकबर की कहानियाँ)

10. प्रतिदिन एक पृष्ठ सुलेख लिखें।



# MATHEMATICS

Q.1 Solve the riddles -

I am less than 12.

I am not 11.

I am  $3+3+3$ .

What am I?



I am more than 5.

I am an even number.

I am the number of fingers  
on 2 hands.

What am I?



I am an odd number.

I am between 7 and 13.

I am 1 dime and 1 penny.

What am I?



I am an even number.

I am a 2-digit number.

I am  $6+6$ .

What am I?



Q.2) Add the followings -

						
1	3	4	5	6	7	8

$$\text{Purple triangle} + \text{Yellow diamond} + \text{Red circle} =$$

$$\text{Grey pentagon} + \text{Green square} + \text{Blue triangle} =$$

$$\text{Orange trapezium} + \text{Yellow diamond} + \text{Green square} =$$


$$\text{Blue triangle} + \text{Blue triangle} + \text{Purple right-angled triangle} =$$

$$\text{Purple right-angled triangle} + \text{Yellow diamond} + \text{Orange trapezium} =$$

$$\text{Green square} + \text{Red circle} + \text{Grey pentagon} =$$



Q.3) Add the numbers -



Add.



$$\begin{array}{r} 25 \\ + 23 \\ \hline \end{array}$$



$$\begin{array}{r} 14 \\ + 65 \\ \hline \end{array}$$



$$\begin{array}{r} 63 \\ + 34 \\ \hline \end{array}$$



$$\begin{array}{r} 24 \\ + 41 \\ \hline \end{array}$$



$$\begin{array}{r} 21 \\ + 14 \\ \hline \end{array}$$



$$\begin{array}{r} 50 \\ + 30 \\ \hline \end{array}$$



$$\begin{array}{r} 52 \\ + 12 \\ \hline \end{array}$$



$$\begin{array}{r} 14 \\ + 72 \\ \hline \end{array}$$



$$\begin{array}{r} 41 \\ + 54 \\ \hline \end{array}$$



$$\begin{array}{r} 61 \\ + 12 \\ \hline \end{array}$$



$$\begin{array}{r} 67 \\ + 21 \\ \hline \end{array}$$



$$\begin{array}{r} 17 \\ + 41 \\ \hline \end{array}$$



Q.4) Solve the crosswords.

### Multiplication crosswords



4	x	3	=						
			x						
				x	9	=			
x			=		x				
2	x	9	=			x	5	=	50
=					=				
10									

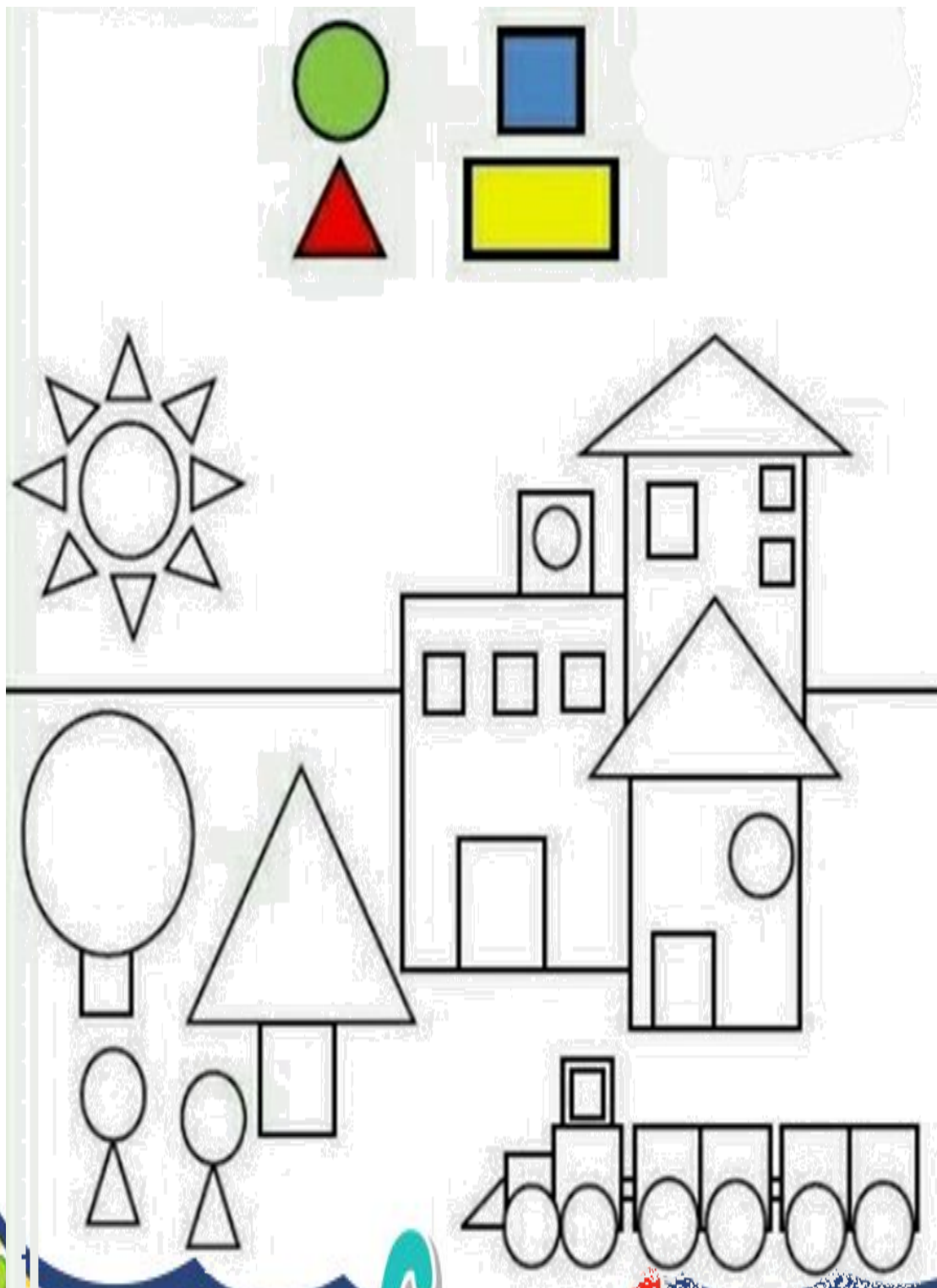


3	x	2	=						
			x						
				x	10	=			
x			=		x				
4	x	5	=			x	6	=	36
=					=				
40									

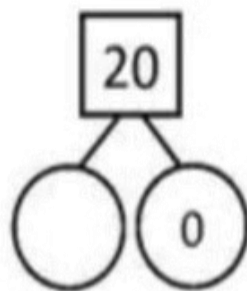
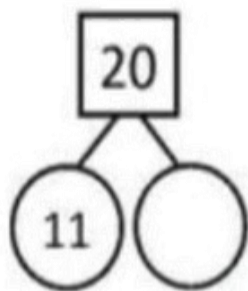
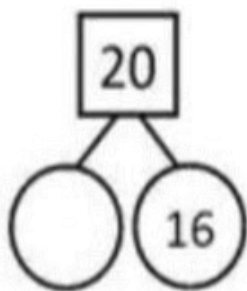
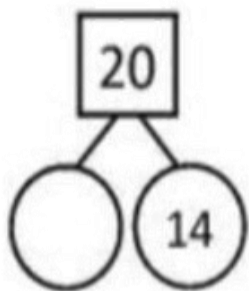
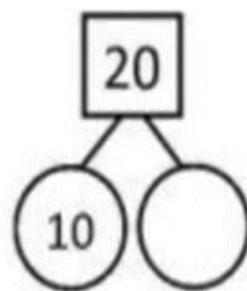
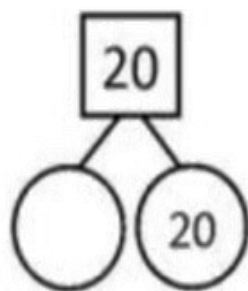
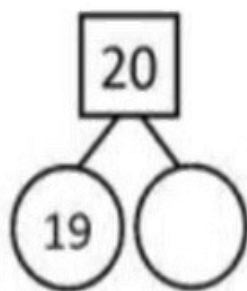
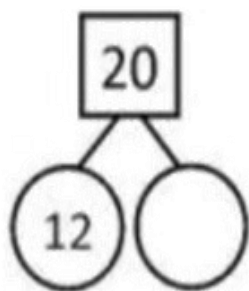
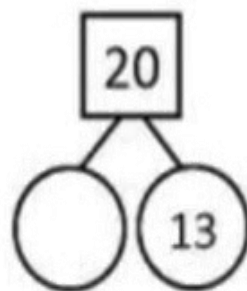
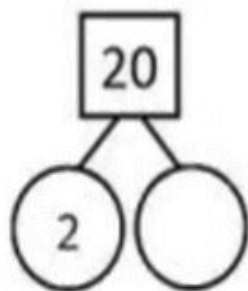
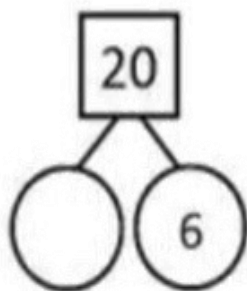
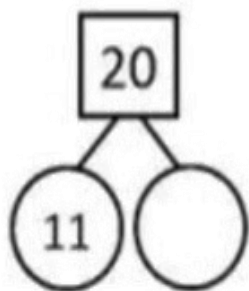
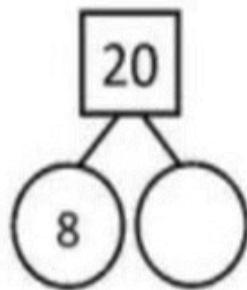
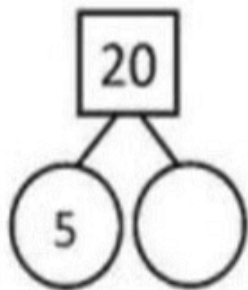
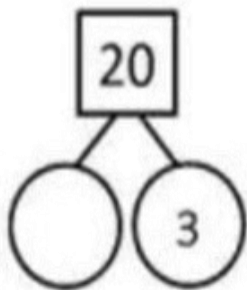
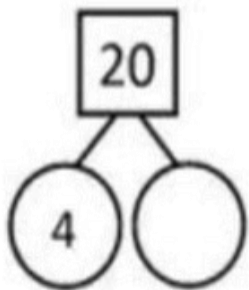




Q.5) Colour the picture -

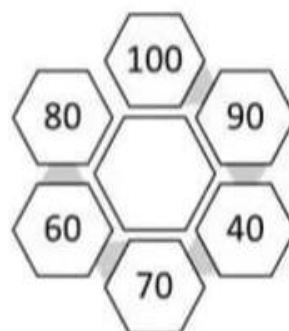
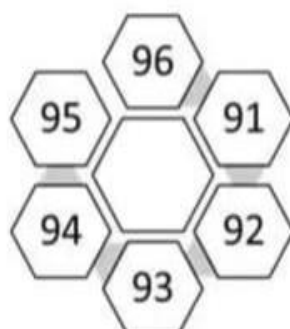
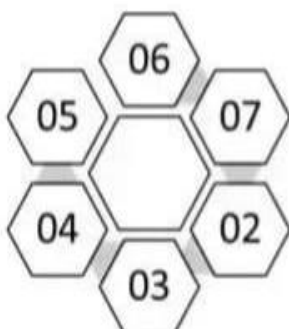
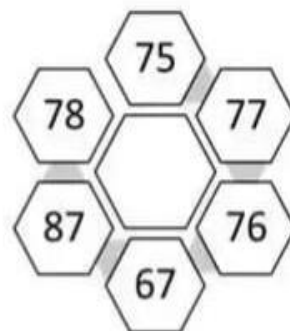
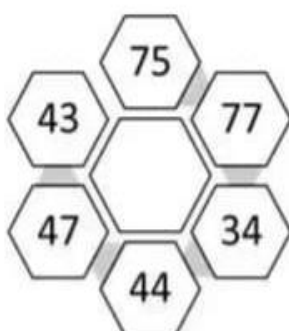
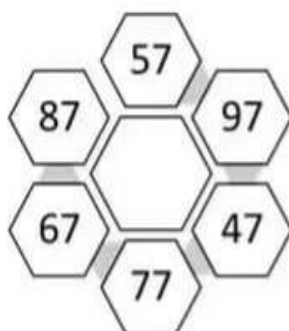
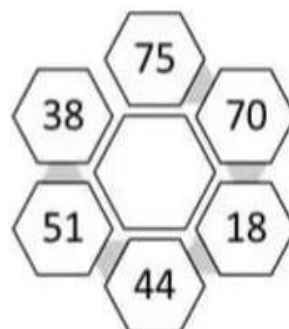
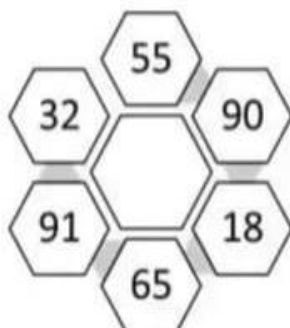
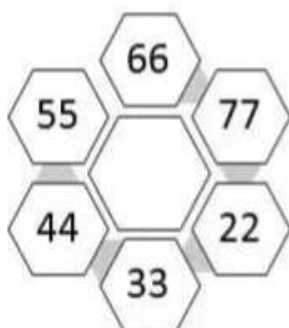


Q.6) Fill in the missing number bonds by using subtraction.





Q.7) Write the biggest number.



7 6 9 8 4 5 3 1

Q.8) Fill in the blanks with correct days -

1. Monday, \_\_\_\_\_, Wednesday  
(A. Tuesday / B. Thursday)
2. Thursday, \_\_\_\_\_, Saturday  
(A. Sunday / B. Friday)
3. Sunday, \_\_\_\_\_, Tuesday  
(A. Saturday / B. Monday)
4. Wednesday, \_\_\_\_\_, Friday  
(A. Tuesday / B. Thursday)
5. Saturday, \_\_\_\_\_, Monday  
(A. Sunday / B. Friday)
6. Tuesday, \_\_\_\_\_, Thursday  
(A. Wednesday / B. Monday)
7. Friday, \_\_\_\_\_, Sunday  
(A. Thursday / B. Saturday)

0 4 1 5 2

Q.9) Write tables from 2-11 in your maths notebook.

7 0

Q.10) Write number names from 51-100 in your maths notebook.

9 8 3 0 5 6 4 0



# E.V.S





Que 1. Write the name of body parts in puzzle given below.

**Across**


1. a \_ \_ 

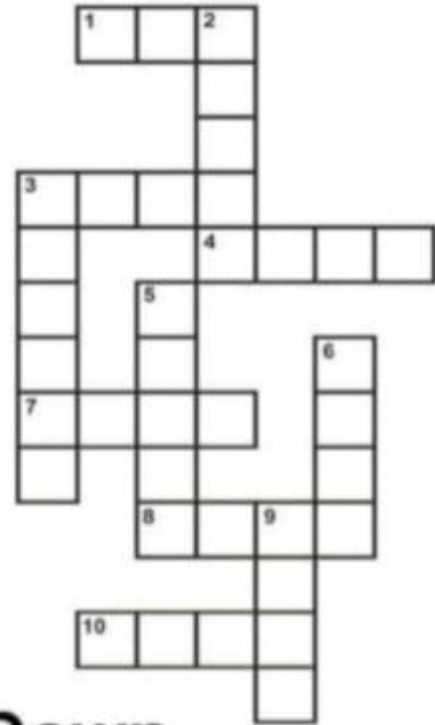
3. f \_ \_ t 

4. h \_ i \_ 


7. e \_ \_ s 


8. h \_ \_ d 


10. e \_ r \_ 





**Down**

2. m \_ \_ t \_ 

3. f \_ \_ g \_ r 

5. t \_ \_ th 

6. h \_ \_ d 

9. n \_ s \_ 



Que 2. Fill in the blanks with suitable word -

1. The \_\_\_\_ is the control center for our body.



brain



heart

2. The \_\_\_\_ pumps blood around the body.



stomach



heart

3. We use our \_\_\_\_ to breathe.



heart



lungs

4. We need our \_\_\_\_ to digest food.



lungs



stomach

Que 3. Write the capital of following states:-

How many states are there in India:- \_\_\_\_\_.

Andhra Pradesh \_\_\_\_\_

Arunachal Pradesh \_\_\_\_\_

Assam \_\_\_\_\_

Bihar \_\_\_\_\_

Chhattisgarh \_\_\_\_\_

Goa \_\_\_\_\_

Gujarat \_\_\_\_\_

Haryana \_\_\_\_\_

Himachal Pradesh \_\_\_\_\_

Jammu and Kashmir \_\_\_\_\_

Jharkhand \_\_\_\_\_

Karnataka \_\_\_\_\_

Kerala \_\_\_\_\_

Madhya Pradesh \_\_\_\_\_

Maharashtra \_\_\_\_\_

Manipur \_\_\_\_\_

Meghalaya \_\_\_\_\_

Mizoram \_\_\_\_\_

Nagaland \_\_\_\_\_

Odisha \_\_\_\_\_

Punjab Chandigarh \_\_\_\_\_

Rajasthan \_\_\_\_\_

Sikkim Gangtok \_\_\_\_\_

Tamil Nadu \_\_\_\_\_

Tripura \_\_\_\_\_

Uttar Pradesh \_\_\_\_\_

Uttarakhand \_\_\_\_\_

West Bengal \_\_\_\_\_

Que.4. General Knowledge Questions:-

1. Who is the Prime minister of india \_\_\_\_\_.

2. Who is the President of India \_\_\_\_\_.

3. Who is the Chief Minister of Madhya Pradesh \_\_\_\_\_.

4. In how many years Elections are held \_\_\_\_\_.



Que.5. Match the body parts with their pictures -



Lungs



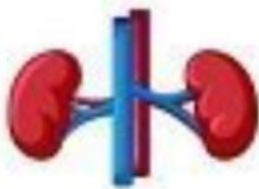
Brain



Stomach



Kidneys



Liver



Heart





Que 6. Colour the picture and write the answers of following questions:-



Que.7. We can reduce wastage of paper by not tearing pages from notebook. Can you suggest some measures to reduce paper wastage?

1. \_\_\_\_\_

2. \_\_\_\_\_

3. \_\_\_\_\_

CoolClipArt.com





**Draw a labelled diagram of parts of computer and also describe briefly about keyboard, monitor and CPU.**



ENJOY YOUR  
**SUMMER**  
*Holidays*

